

Solving Systems of Equations by Substitution

Solve each system by substitution.

1) $y = 6x - 11$
 $-2x - 3y = -7$

2) $2x - 3y = -1$
 $y = x - 1$

3) $y = -3x + 5$
 $5x - 4y = -3$

4) $-3x - 3y = 3$
 $y = -5x - 17$

5) $y = -2$
 $4x - 3y = 18$

6) $y = 5x - 7$
 $-3x - 2y = -12$

7) $-4x + y = 6$
 $-5x - y = 21$

8) $-7x - 2y = -13$
 $x - 2y = 11$

9) $-5x + y = -2$
 $-3x + 6y = -12$

10) $-5x + y = -3$
 $3x - 8y = 24$

$$\begin{aligned} 11) \quad x + 3y &= 1 \\ -3x - 3y &= -15 \end{aligned}$$

$$\begin{aligned} 12) \quad -3x - 8y &= 20 \\ -5x + y &= 19 \end{aligned}$$

$$\begin{aligned} 13) \quad -3x + 3y &= 4 \\ -x + y &= 3 \end{aligned}$$

$$\begin{aligned} 14) \quad -3x + 3y &= 3 \\ -5x + y &= 13 \end{aligned}$$

$$\begin{aligned} 15) \quad 6x + 6y &= -6 \\ 5x + y &= -13 \end{aligned}$$

$$\begin{aligned} 16) \quad 2x + y &= 20 \\ 6x - 5y &= 12 \end{aligned}$$

$$\begin{aligned} 17) \quad -3x - 4y &= 2 \\ 3x + 3y &= -3 \end{aligned}$$

$$\begin{aligned} 18) \quad -2x + 6y &= 6 \\ -7x + 8y &= -5 \end{aligned}$$

$$\begin{aligned} 19) \quad -5x - 8y &= 17 \\ 2x - 7y &= -17 \end{aligned}$$

$$\begin{aligned} 20) \quad -2x - y &= -9 \\ 5x - 2y &= 18 \end{aligned}$$

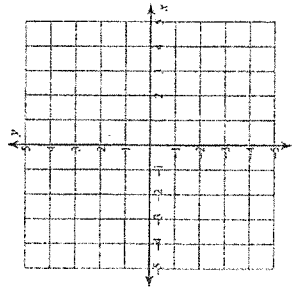
Name _____ Date _____ Period _____

Solving Systems of Equations by Graphing

Solve each system by graphing.

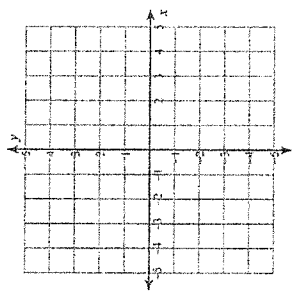
1) $y = -\frac{5}{3}x + 3$

$y = \frac{1}{3}x - 3$



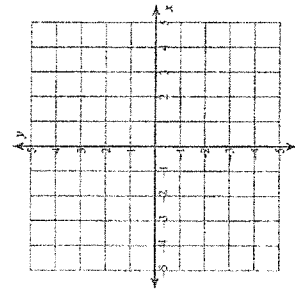
2) $y = 4x + 3$

$y = -x - 2$



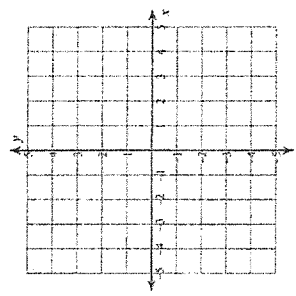
3) $y = -\frac{1}{2}x - 1$

$y = \frac{1}{4}x - 4$



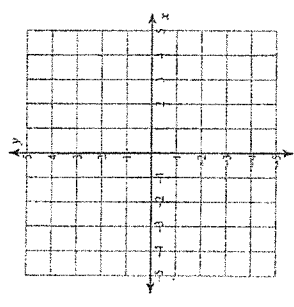
4) $y = -1$

$y = -\frac{5}{2}x + 4$



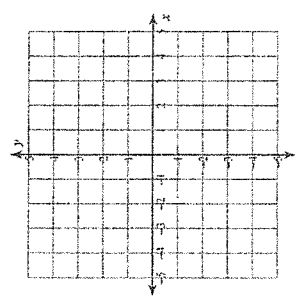
5) $y = 3x - 4$

$y = -\frac{1}{2}x + 3$



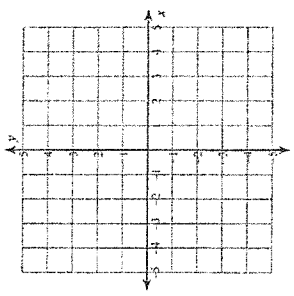
7) $y = -\frac{1}{2}x - 2$

$y = -\frac{3}{2}x + 2$



6) $y = -2x + 2$

$y = -2x - 2$



8) $y = \frac{1}{3}x - 3$

$y = -x + 1$

