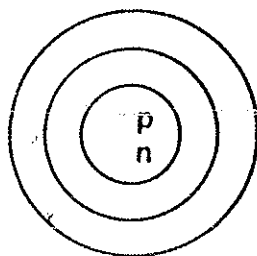


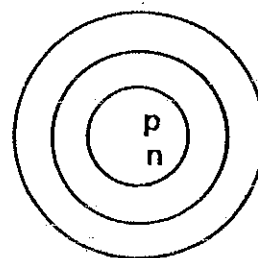
Atomic Structure

Use the information provided for each element to complete the diagrams. Draw the electrons in their proper shells, and place the correct numbers in the nucleus to indicate the number of protons and the number of neutrons.

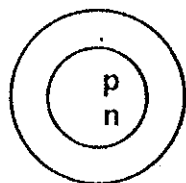
1. Sulfur: atomic number 16
 atomic mass 32



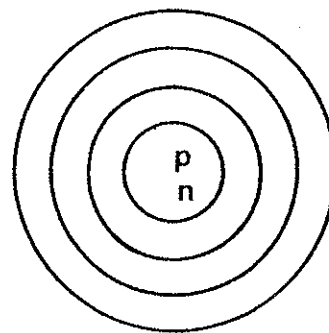
4. Sodium: atomic number 11
 atomic mass 23



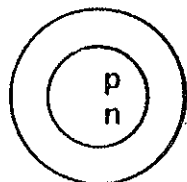
2. Beryllium: atomic number 4
 atomic mass 9



5. Potassium: atomic number 19
 atomic mass 39



3. Nitrogen: atomic number 7
 atomic mass 14



6. Argon: atomic number 18
 atomic mass 40

