

# Homework Practice

## Measure Angles

**Exercises**

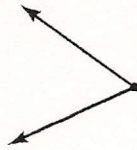
Classify each

angle as acute, right, obtuse, or straight.

1.



2.



3.




4.



5.



6.



7.



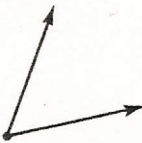
8.



9.



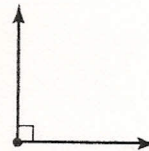
10.



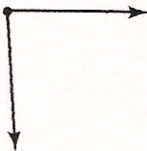
11.



12.



13.



14.



15.



For more practice, go to [www.connected.mcgraw-hill.com](http://www.connected.mcgraw-hill.com).