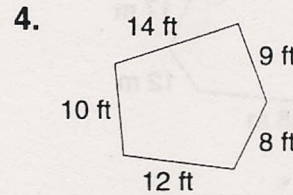
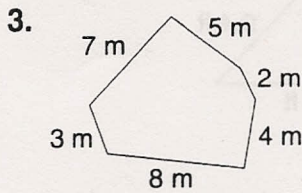
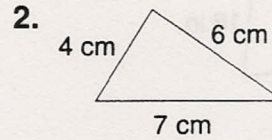
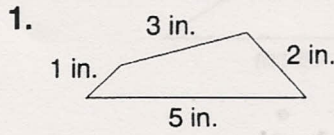


LESSON

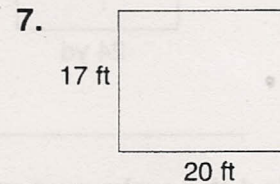
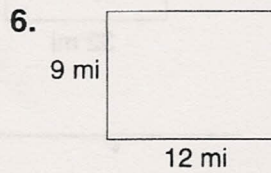
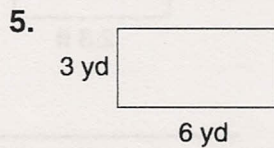
Practice A

10-1 Finding Perimeter

Find the perimeter of each figure.

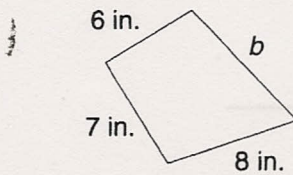


Find the perimeter P of each rectangle.

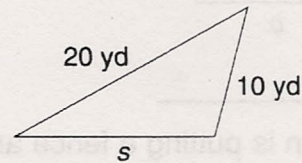


Find the unknown measure.

8. What is the length of side b if the perimeter equals 30 in.?



9. What is the length of side s if the perimeter equals 45 yd?



10. A triangular rug has sides that measure 13 feet, 16 feet, and 12 feet. What is the perimeter of that rug?

11. The perimeter of a rectangular swimming pool is 140 meters. The pool is 20 meters wide. How long is the pool?