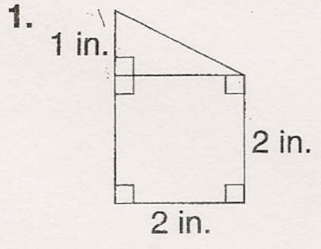
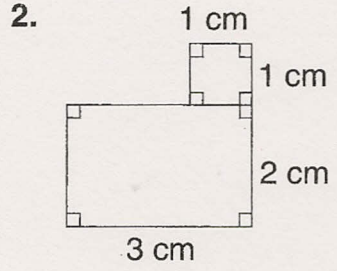
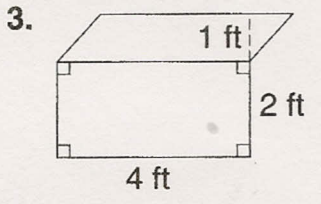


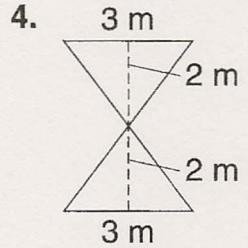
LESSON 10-3 Practice A
Break into Simpler Parts

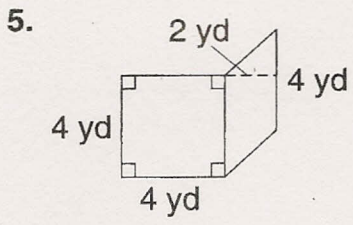
Find the area of each polygon.

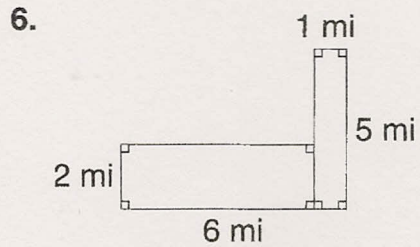












7. A rectangular painting is made up of two congruent squares with sides that measure 2 feet. What is the area of the entire painting?

8. A carpet is made up of two congruent triangles. The base of each triangle is 3 feet and the height is 6 feet. What is the area of the entire carpet?
