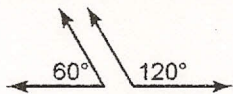


Skills Practice

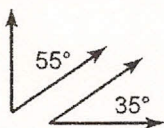
Angle Relationships

Classify each pair of angles as *complementary*, *supplementary*, or *neither*.

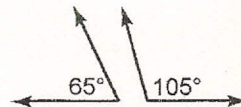
1.



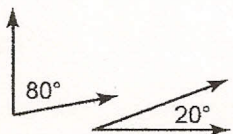
2.



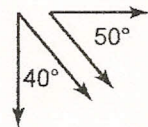
3.



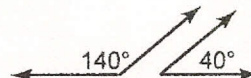
4.



5.

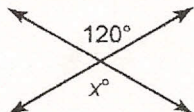


6.

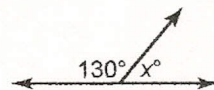


Find the value of x in each figure.

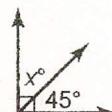
7.



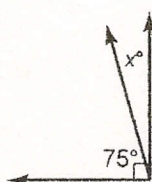
8.



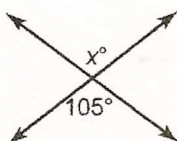
9.



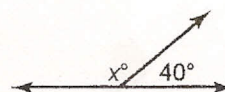
10.



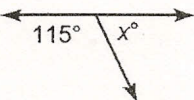
11.



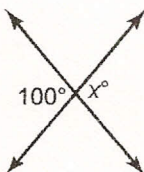
12.



13.



14.



15.

