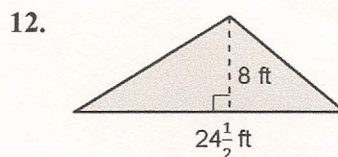
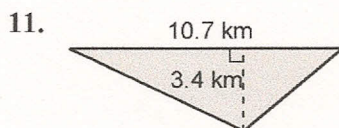
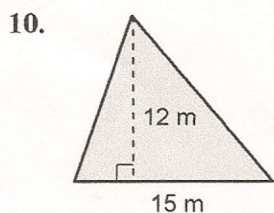
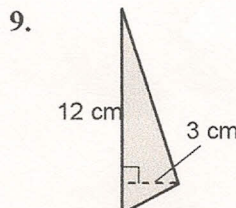
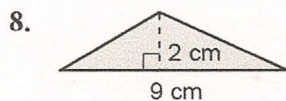
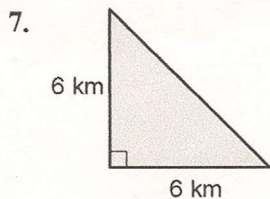
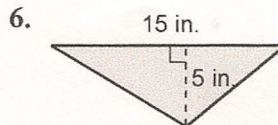
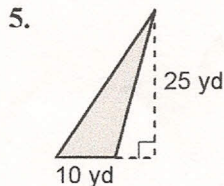
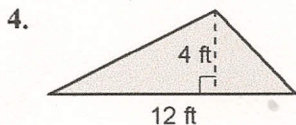
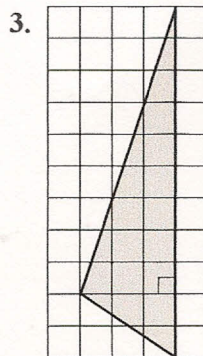
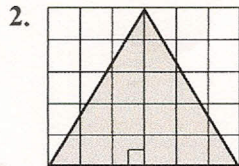
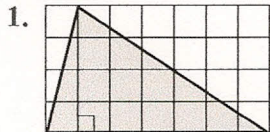


Skills Practice

Area of Triangles

Find the area of each triangle.



Find the missing dimension.

13. base: 4 in.
area: 22 in^2

14. height: 1 yd
area: 2.5 yd^2

15. base: 5 ft
area: $5\frac{5}{6} \text{ ft}^2$