
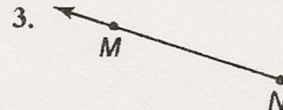
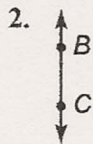


# Skills Practice

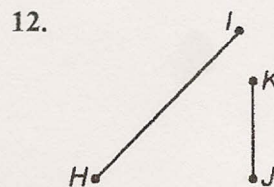
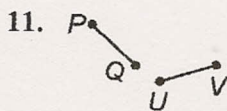
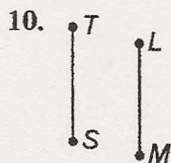
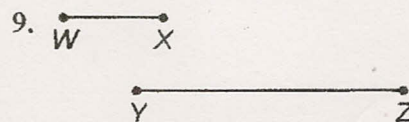
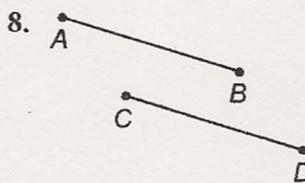
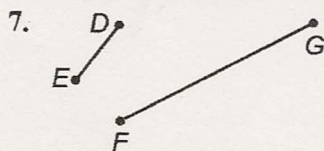
## Points, Lines, and Planes

### Exercises

Identify each figure. Then name it using symbols.



Measure each segment. Then determine whether each pair of line segments are congruent. Write *yes* or *no*.



Classify each pair of lines as *intersecting*, *perpendicular*, or *parallel*. Choose the most specific term.

