

Name : _____

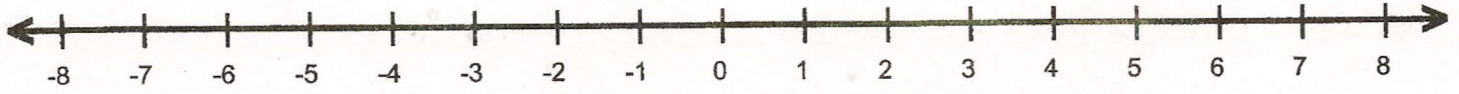
Score : _____

Teacher : _____

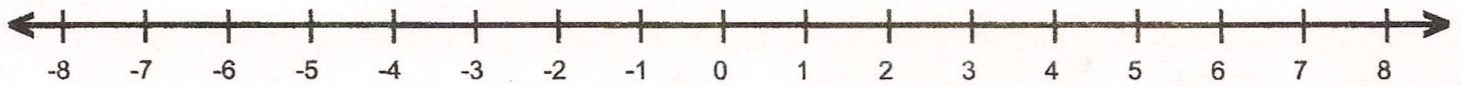
Date : _____

Graph each set of integers on a number line.

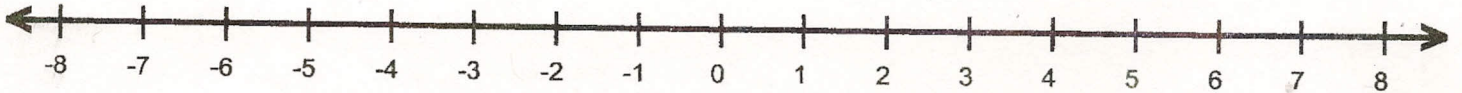
1. (7, -2, 4, -5)



2. (-3, 0, 8, -8)



3. (2, -6, -7, 4)



Write an integer for each situation.

5. a 15-yard gain in a football game

6. three miles below sea level

7. a loss of 2 hours

8. 10° below zero

9. a gain of \$2 per share of stock

10. spending \$25 of your birthday money on clothing