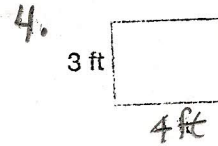
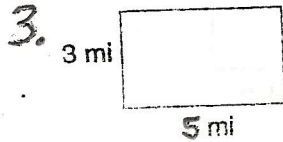
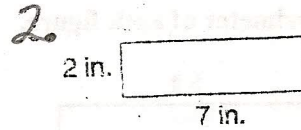
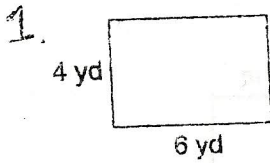


Name: \_\_\_\_\_

Period: \_\_\_\_\_



Find the area of each rectangle.



5. A square room has sides that each measure 5 feet. How many square feet of carpet is needed to cover the room's entire floor?

6. A rectangular coffee table is 2 feet wide and 4 feet long. How many square feet of glass is needed to cover the entire table top?

Find the area of each rectangle.



Find the area of each parallelogram.

