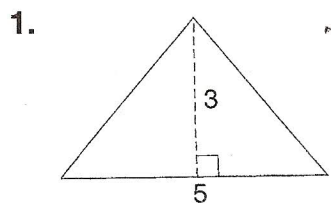
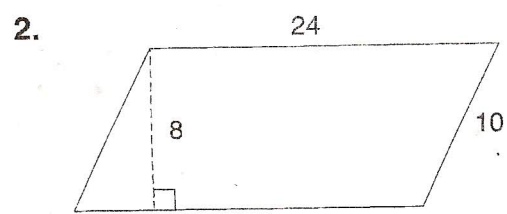


LESSON **Puzzles, Twisters & Teasers**
10-2 **What's Furry?**


Find the area of each figure below. Then find the letter matching the answer in the Answer Box. To solve the riddle, match the letter of the correct answer to the number of the problem.



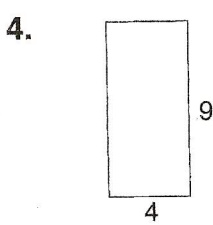
Area = _____ units²



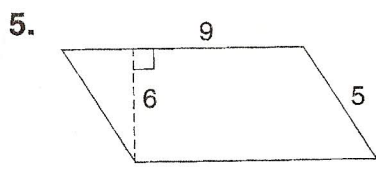
Area = _____ units²



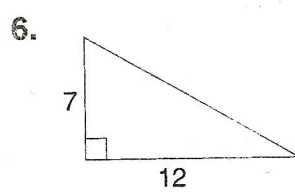
Area = _____ units²



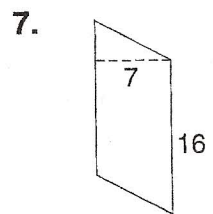
Area = _____ units²



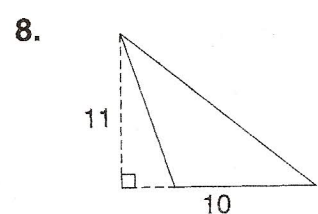
Area = _____ units²



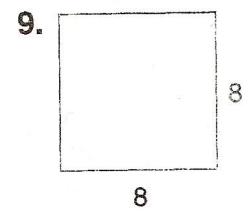
Area = _____ units²



Area = _____ units²



Area = _____ units²



Area = _____ units²

Answer Box					
A = 112	D = 26	H = 42	K = 64	N = 55	R = 15
B = 28	E = 46	I = 63	L = 110	O = 54	T = 26
C = 7.5	G = 30	J = 240	M = 192	P = 36	W = 72

What do you call a monkey that sells potato chips?

7 1 6 3 4 2 5 8 9