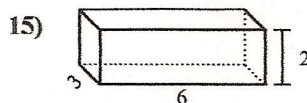
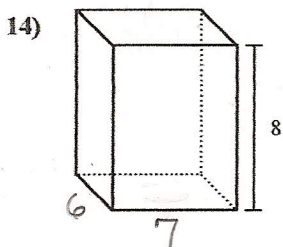
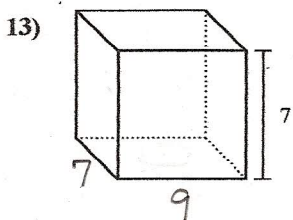
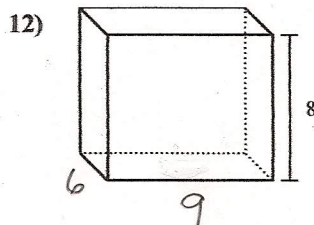
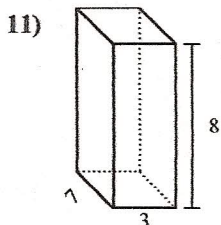
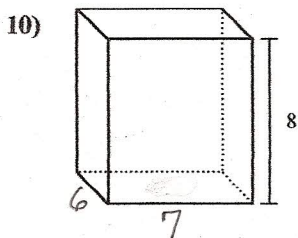
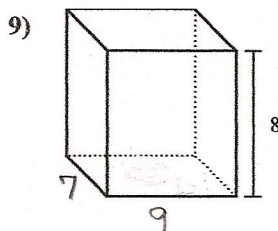
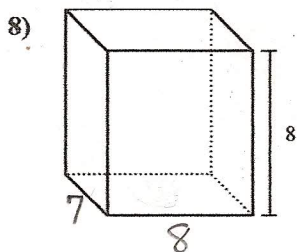
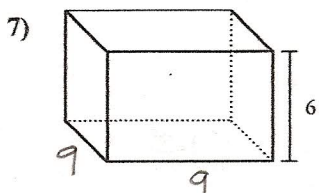
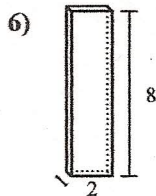
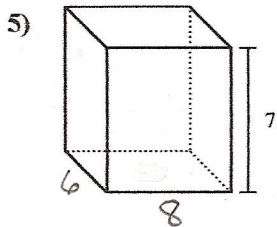
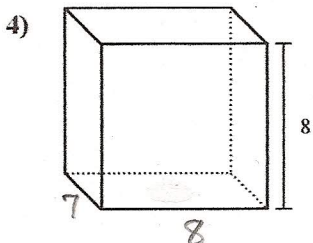
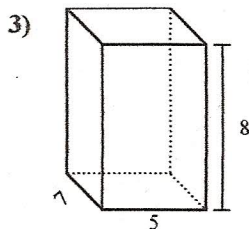
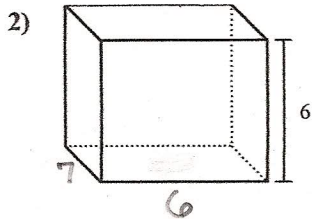
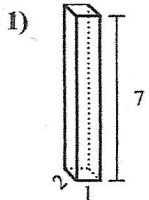




Find the volume of each rectangular prism. Remember

$V=L \times W \times H$

Answers



1. _____
2. _____
3. _____
4. _____
5. _____
6. _____
7. _____
8. _____
9. _____
10. _____
11. _____
12. _____
13. _____
14. _____
15. _____

1-10	93	87	80	73	67	60	53	47	40	33
11-15	27	20	13	7	0					