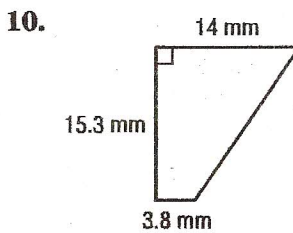
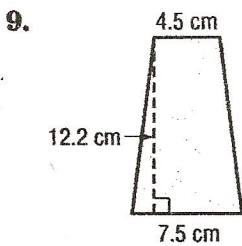
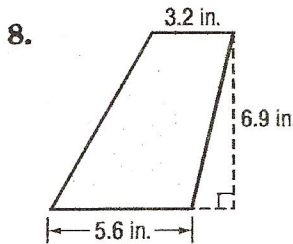
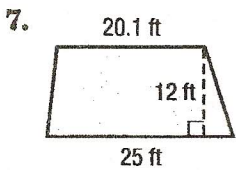
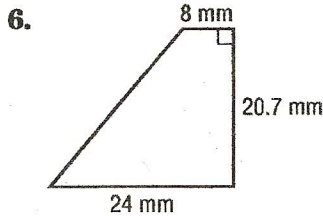
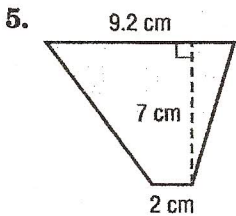
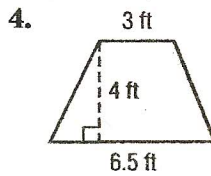
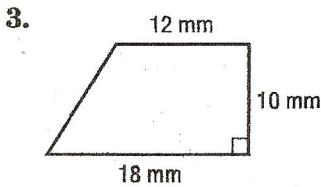
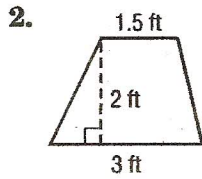
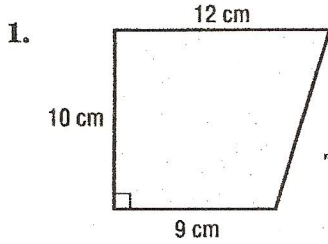
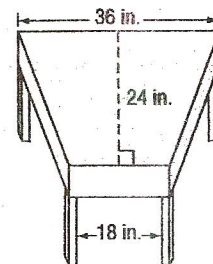


**Skills Practice**  
**Area of Trapezoids**

Find the area of each figure. Round to the nearest tenth if necessary.



11. trapezoid: bases 22.8 mm and 19.7 mm, height 36 mm  
 12. trapezoid: bases 5 ft and 3.5 ft, height 7 ft  
 13. **DESKS** What is the area of the top of the desk shown at right?



Copyright © Glencoe/McGraw-Hill, a division of The McGraw-Hill Companies, Inc.