






Homework Practice

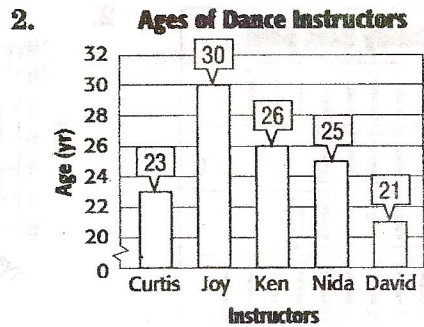
Mean

Find the mean for each set of data.

1. **Number of Toys Collected**

Brian	
Kathy	
Lucita	
Terrell	

Key:  = 1 toy




3.

Falls	Height (ft)
Bridal Veil	153
Horsetail	176
Latourell	249
Metlako	150
Multnomah	620
Wahkeena	242

4. **GARDENING** Alan earned \$23, \$26, \$25, \$24, \$23, \$24, \$6, \$24, and \$23 gardening. What is the mean of the amounts he earned?

Find the mean for number of cans collected. Explain the method you used.

5. 57, 59, 60, 58, 58, 56

 For more practice, go to www.connected.mcgraw-hill.com.