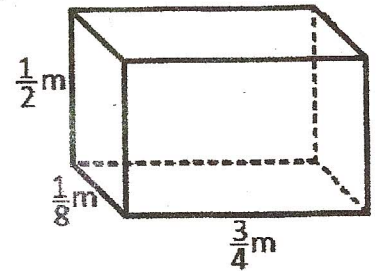

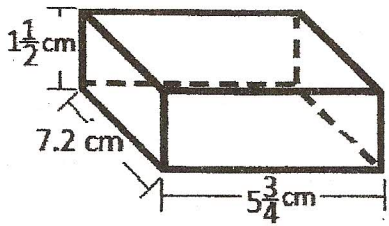


28. What is the surface area, in square centimeters or meters, of the figure shown below?



29. What is the mean and median of the following numbers?

50, 60, 45, 30, 80, and 65

Mean: _____

Median: _____

30. Find the interquartile range for the data set below.

22, 28, 36, 38, 48, and 55