

Name: _____

Score: _____

Perimeter
add up all
the sides

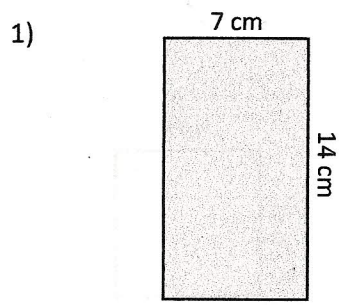
Area and Perimeter of Rectangles

Area of Rectangle

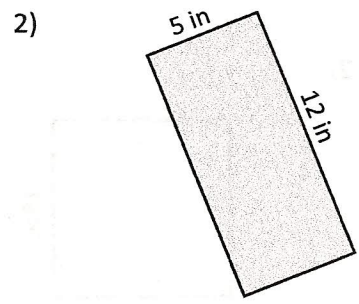
$A = l \times w$
length width

*answer in units²

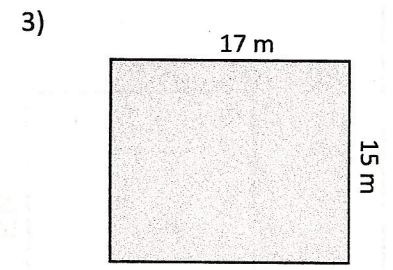
Find the area and perimeter of each rectangle.



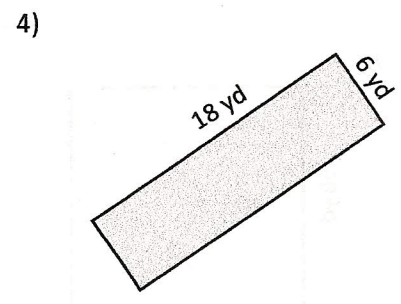
Area = _____
Perimeter = _____




Area = _____
Perimeter = _____



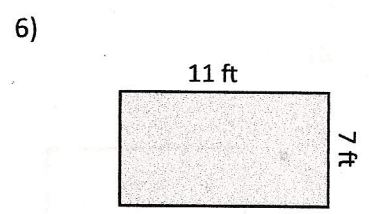
Area = _____
Perimeter = _____



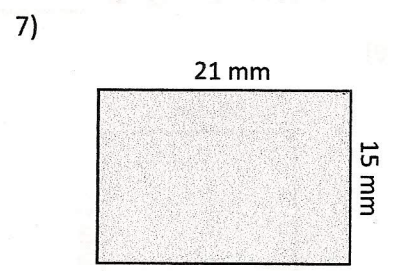
Area = _____
Perimeter = _____



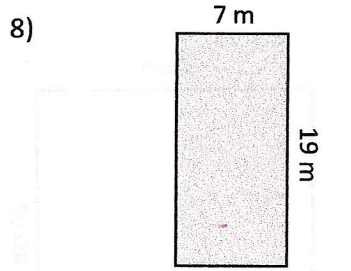
Area = _____
Perimeter = _____



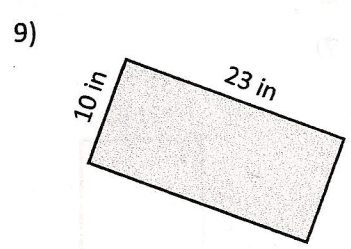
Area = _____
Perimeter = _____



Area = _____
Perimeter = _____



Area = _____
Perimeter = _____



Area = _____
Perimeter = _____