

Name: _____

Score: _____

Perimeter
add up all
the sides

Area of Square

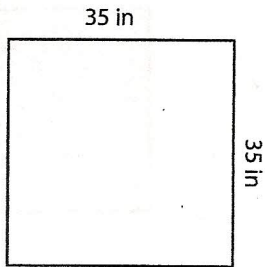
$A = l \times w$
length width

*answer in units²

Square - Area + Perimeter

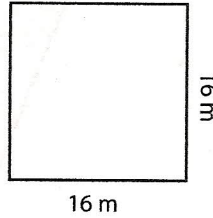
Find the area of each square.

1)



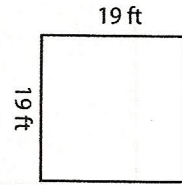
Perimeter = _____
Area =

2)



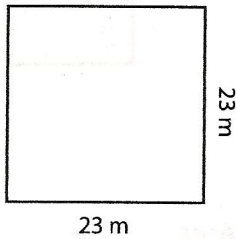
Perimeter = _____
Area =

3)



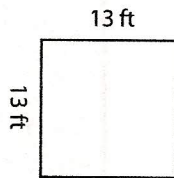
Perimeter = _____
Area =

4)



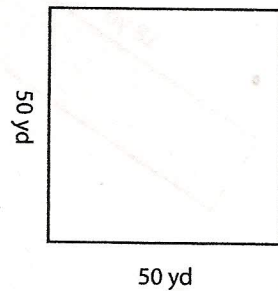
Area =
Perimeter = _____

5)



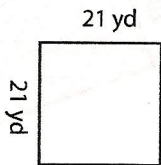
Area =
Perimeter = _____

6)



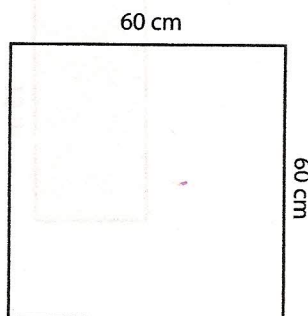
Area =
Perimeter = _____

7)



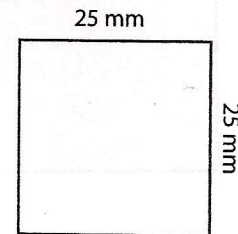
Area =
Perimeter = _____

8)



Area =
Perimeter = _____

9)



Area =
Perimeter = _____