
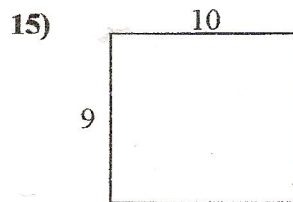
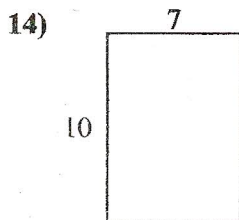
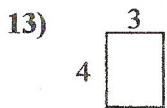
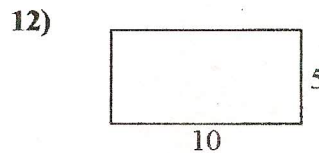

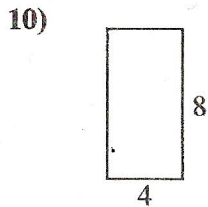
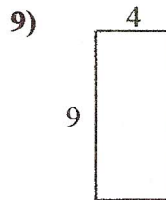
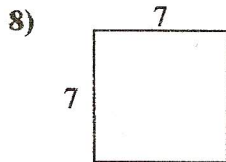
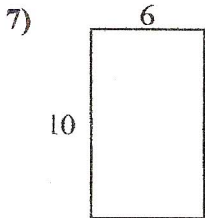

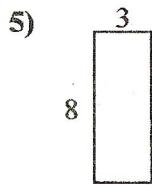
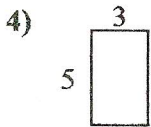
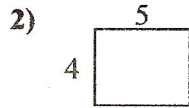


Find the perimeter of each figure. Each figure is in inches (in). Not to scale.



$$\begin{array}{r} 2 \quad 10 \\ \times 2 \quad \times 2 \\ \hline 4 \quad 20 \\ \hline 4 + 20 = 24 \end{array}$$

inches



Answers

1. 24 inches label
2. _____
3. _____
4. _____
5. _____
6. _____
7. _____
8. _____
9. _____
10. _____
11. _____
12. _____
13. _____
14. _____
15. _____