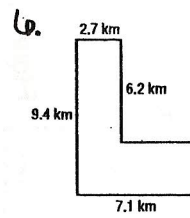
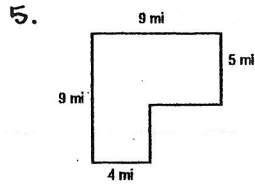
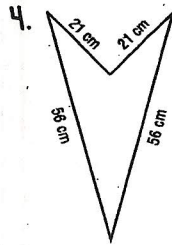
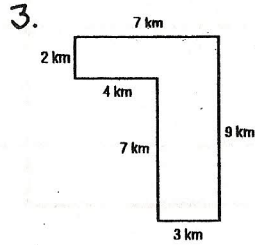
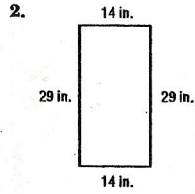
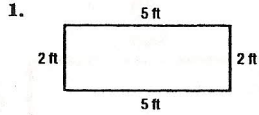


Skills Practice

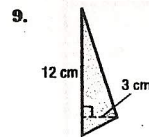
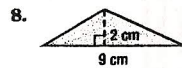
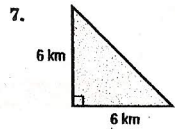
Perimeter of Composite Figures

Find the perimeter of each figure. Use 3.14 for π .



Area of Triangles

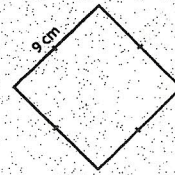
Find the area of each triangle.




Perimeter and Area

Name: _____ Class: _____


Find the area and perimeter area of the following squares and rectangles.




Perimeter: _____
Area: _____




Perimeter: _____
Area: _____



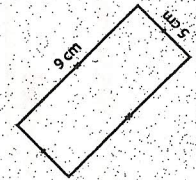
Perimeter: _____
Area: _____



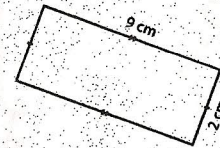
Perimeter: _____
Area: _____




Perimeter: _____
Area: _____




Perimeter: _____
Area: _____



Perimeter: _____
Area: _____



Perimeter: _____
Area: _____



Perimeter: _____
Area: _____