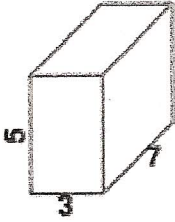


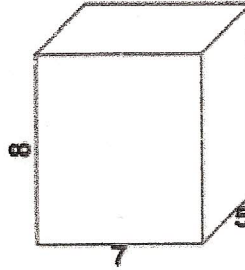
Volume/Surface Area

1 a.



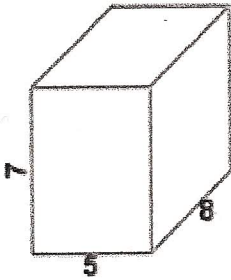
Find the surface area of this rectangular prism.

1 b.



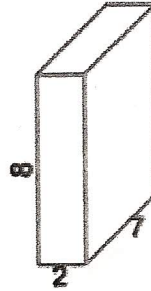
Find the volume of this rectangular prism.

2 a.




Find the volume of this rectangular prism.

2 b.




Find the surface area of this rectangular prism.

3 a.



Find the surface area of this rectangular prism.

3 b.



Find the surface area of this rectangular prism.